

JSTSE Guru

Mukhyamantri Vigyan Pratibha Pariksha 2021

Exam Date: 28th March 2021

- Average weight of a group of 6 girls is 26. If we replace a girl of weight 30 in the group with another girl so that new average increases by 5. Find the weight of the new girl.
 - 30
 - 40
 - 50
 - 60
- The difference between compound interest and simple interest of a certain sum is 10, While interest is provided @5% p.a for 2 years. Find the sum.
 - 3000
 - 4000
 - 4500
 - 5000
- Tarun is younger than Taukeer by 8 years and ratio of their ages is 7:9 what is the age of Taukeer?
 - 36
 - 63
 - 45
 - 54
- The present age of Ram, Rahim and Robert are in proportion of 5:7:8. Six years ago, the sum of their ages is 42. Find their present ages
 - 20, 25, 30
 - 25, 35, 40
 - 20, 28, 32
 - 15, 21, 24
- A train of length 125m long passes a man, running at 5 km/hr in the same direction in which the train is going, in 10 seconds. The speed of the train is:
 - 45 km/hr
 - 50 km/hr
 - 54 km/hr
 - 55 km/hr
- Today is Wednesday, after 68 days, it will be
 - Monday
 - Tuesday
 - Wednesday
 - Thursday

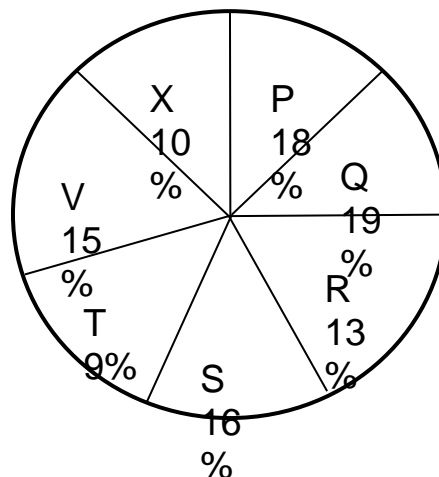
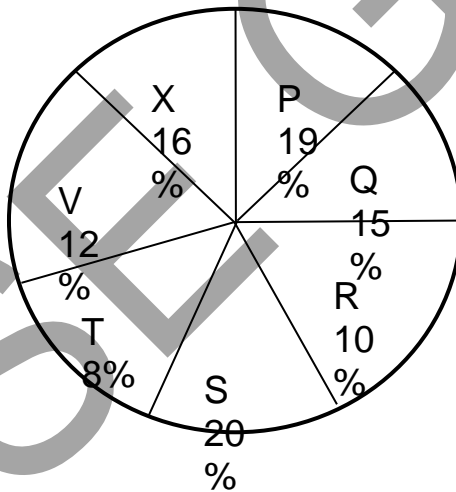
7. There are 7 girls on a bus and each girl has 7 backpacks. In each backpack, there are 7 big cats, for every big cat, there are 7 kittens on bus. How many legs are on the bus, not counting the driver?
- (1) 10000
 (2) 11000
 (3) 10990
 (4) 9990

8. What will be appear in '?'

50	60	70
87	90	93
43	?	25

- (1) 40
 (2) 75
 (3) 60
 (4) 34

Directions (Questions 9 - 13): Study the following pie – chart carefully and answer the following questions – Distribution of candidates who were enrolled for MBBS entrance exam and the candidates (out of those enrolled, who passed the exam in different institutions (P, Q, R, S, T, V,X) is given in the following pie - chart)



9. What percentage of candidates passed the exam from Institution T out of the total number of candidates enrolled from the same Institution?
- (1) 50%
 - (2) 62.5%
 - (3) 67.5%
 - (4) 80%
10. Which institute has the highest percentage of candidates passed to the candidates enrolled.
- (1) P
 - (2) Q
 - (3) R
 - (4) S
11. The number of candidates passed from Institutes S and P together exceeds the number of candidates enrolled from Institute T and R together by:-
- (1) 250
 - (2) 299
 - (3) 270
 - (4) 228
12. What is the percentage of candidates passed to the candidate enrolled for institutes Q and R together?
- (1) 60%
 - (2) 70%
 - (3) 76.8%
 - (4) 90%
13. What is the ratio of candidates passed to the candidates enrolled from institute P?
- (1) 4:11
 - (2) 56:61
 - (3) 11:19
 - (4) 54:95
14. On increasing the price of ticket of zoo by 30% the visitors will be decreased by 20%. What will be the effect on revenue?
- (1) Increase by 10%
 - (2) Decrease by 10%
 - (3) Increase by 4%
 - (4) Decrease by 4%
15. Find the odd one out:
2, 5, 10, 17, 26, 37, 48, 65
- (1) 17
 - (2) 37
 - (3) 48
 - (4) 26
16. Find the missing figure in the series:- 18, 97, 26, 89, ?, 81
- (1) 21
 - (2) 34
 - (3) 42
 - (4) 10

Directions (Questions 17 - 19): In the following question there is a letter series with one term missing shown by (?). Find the term from the four given alternatives.

17. B, F, J, ?, R

- (1) N
- (2) P
- (3) M
- (4) O

18. B, C, ? G, K

- (1) F
- (2) D
- (3) E
- (4) J

19. CNL, BLI, AJF, ZHC, ?

- (1) XDY
- (2) YFZ
- (3) YFA
- (4) XFY

20. Marathon is to race as hibernation is to -

- (1) Winter
- (2) Bear
- (3) Dream
- (4) Sleep

21. Cup is to coffee as bowl is to

- (1) Dish
- (2) Soup
- (3) Spoon
- (4) Food

22. A train running at the speed of 60 km/hr. crosses a pole in 9 seconds. What is the length of the train?

- (1) 120 metres
- (2) 180 metres
- (3) 324 metres
- (4) 150 metres

23. Pointing to a photograph of a boy Ramesh said, 'He is the son of the only son of my mother'. How is Ramesh related to that boy?

- (1) Brother
- (2) Uncle
- (3) Cousin
- (4) Father

24. If $A + B$ means A is the brother of B; $A - B$ means A is the sister of B and $A \times B$ means A is the father of B. Which of the following means that C is the son of M?

- (1) $M - N \times C + F$
- (2) $M \times N - C + F$
- (3) $N + M - F \times C$

$$(4) F - C + N \times M$$

Directions (Questions 25 – 28): The cards bearing letters of the word 'MATHEMATICS' are placed in a bag. A card is taken out from the bag without looking into the bag at random.

25. What is the probability of getting 'M'?

- (1) $\frac{2}{11}$
- (2) $\frac{4}{11}$
- (3) $\frac{3}{11}$
- (4) $\frac{5}{11}$

26. What is the probability of getting a vowel?

- (1) $\frac{2}{11}$
- (2) $\frac{4}{11}$
- (3) $\frac{3}{11}$
- (4) $\frac{5}{11}$

27. What is the probability of getting a consonant?

- (1) $\frac{2}{11}$
- (2) $\frac{4}{11}$
- (3) $\frac{3}{11}$
- (4) $\frac{5}{11}$

28. What is the probability of getting 'X'?

- (1) $\frac{2}{11}$
- (2) $\frac{4}{11}$
- (3) $\frac{3}{11}$
- (4) 0

29. A boat takes 8 hours to move downstream from point P to Q and to return to point P moving upstream. If the speed of the stream is 4 km/hr and the speed of the boat in still water is 8 km/hr, what is the distance between point P and Q.

- (1) 14 km
- (2) 48 km
- (3) 24 km
- (4) 16 km

30. A number of friends decided to go on a picnic and planned to spend Rs 96 on eatables. Four of them, however, did not turn up as a consequence, the remaining ones had to contribute Rs 4 each extra. The number of those who attended the picnic was

- (1) 8
- (2) 12
- (3) 16
- (4) 24

31. The circumference of a jogging track is 700 meter. Prashant and Tanu start walking from the same time in opposite direction. If they are walking at 6 km/hr and 8 km/hr respectively, after how much time they will meet?

- (1) 2 min
- (2) 4 min
- (3) 3 min
- (4) 5 min

32. If price of soap A is 25% more than the price of soap B, then price of soap B is how much less than price of

soap A?

- (1) 25%
- (2) 30%
- (3) 15%
- (4) 20%

33. $\frac{1}{2}$ and $\frac{1}{4}$ parts of two bottles are filled with milk. The bottles are then filled completely with water and the content of bottles is poured into a container. Find the ratio of the milk and water in the container?

- (1) 3:5
- (2) 2:1
- (3) 1:2
- (4) 5:3

34. Two container A and B contain mix of water and milk in the ratio of 5:2 and 7:6 respectively. Find the ratio in which these two mixtures can be mixed so that a new mixture formed in the container C in the ratio of 8:5 –

- (1) 2:7
- (2) 7:9
- (3) 9:7
- (4) 5:7

35. If $2^{x-1} + 2^{x+1} = 320$, then x is equal to

- (1) 5
- (2) 7
- (3) 6
- (4) 8

36. Value of $(256)^{0.16} \times (256)^{0.09}$ is

- (1) 16
- (2) 10
- (3) 8
- (4) 4

37. The area of a rectangular plot is increased by 30% and its width remain as it was before. What will be the ratio between the area of new rectangle and the original rectangle?

- (1) 13:10
- (2) 10:13
- (3) 7:3
- (4) 3:7

38. If A : B, B:C and C:D

1:2, 3:2 1:3

Then find A:B:C:D

- (1) 1:3:4:6
- (2) 3:6:4:12
- (3) 1:2:3:4
- (4) 1:2:3:2

Directions (Questions 39 – 40): See the following data related to salary and bonus of different workers:

Post	No of Employers	Annual Salary	Bonus%
Manager	3	5,40,000	40
Worker	5	1,20,000	30
Trainee	4	60,000	20

39. What is the average bonus?

- (1) 72, 000
- (2) 73, 000
- (3) 60, 000
- (4) 50, 000

40. What is the average salary?

- (1) 2, 00, 000
- (2) 2, 40, 000
- (3) 2, 05, 000
- (4) 2, 10, 000

Directions (questions 41 – 43): Following table is the record of Revenue, cost and tax of a company.

Year	Revenue	Cost
2012	800	600
2013	1100	850
2014	1200	900
2015	1200	1000
2016	1350	1050
2017	1500	1200
2018	1600	1200
2019	1850	1400

41. Which two years has similar profit after tax?

- (1) 2016 and 2017
- (2) 2017 and 2018
- (3) 2018 and 2019
- (4) 2012 and 2013

42. What is the percentage change in profit after tax from 2015 to 2016?

- (1) 40% increase
- (2) 40% decrease
- (3) 20% increase
- (4) 20% decrease

43. What is the ratio of profit after tax between 2014 and 2013?

- (1) 5:6
- (2) 3:4
- (3) 6:5
- (4) 7:8

Directions (Questions 44 – 48): The students of class IX have to choose one club from Music, Yoga, Fine Arts, Dramatics and Dance. The Data given below shows the choice made by girls and boys of the class study the table and answer the questions.

44. How many students are there in class IX?

Club	Dance	Dramatics	Fine Arts	Yoga	Music
Girls	31	19	27	10	15
Boys	10	17	21	17	12

- (1) 189
- (2) 169
- (3) 179
- (4) 173

45. Which is the most preferred club by girls?

- (1) Music
- (2) Dance
- (3) Find Arts
- (4) Dramatics

46. Which is the least preferred club by boys?

- (1) Music
- (2) Dance
- (3) Find Arts
- (4) Dramatics

47. For which club the difference between boys and girls is the least?

- (1) Music
- (2) Dance
- (3) Find Arts
- (4) Dramatics

48. For which club difference between boys and girls is the maximum?

- (1) Music
- (2) Dance
- (3) Find Arts
- (4) Dramatics

49. The ratio of land and water on Earth is 1:2. In the northern hemisphere the ratio is 2:3. What is the ratio in the southern hemisphere?

- (1) 1:11
- (2) 2:11
- (3) 3:11
- (4) 4:11

50. Which least number should be subtracted from 1936 so that the resulting number, when divided by 9, 10 and 15, will leave the same remainder 8 in each case?

- (1) 39
- (2) 38
- (3) 37
- (4) 36

51. If 30% of $x = y$, then $y\%$ of 40 is same as:

- (1) 6% of x
- (2) 8% of x
- (3) 12% of x
- (4) 16% of x

52. Two trains 600 m and 400 m long are running in opposite directions on parallel tracks. Their speeds are 40 km/h and 32 km/h respectively. Find the time taken by two trains to cross each other.

- (1) 40 sec.
- (2) 50 sec.
- (3) 54 sec.
- (4) 48 sec.

52. If $x^2 + \frac{1}{x^2} = 51 (x > 0)$, then the value of $x^3 + \frac{1}{x^3}$ is:

- (1) 343
- (2) 322
- (3) $49/\text{sqrt}7$
- (4) 364

52. If $x = 3 + 2\sqrt{2}$ and $y = 5 - 2\sqrt{6}$ then the value of $\sqrt{x} + \sqrt{y}$ is

- (1) $1 + \sqrt{3}$
- (2) $\sqrt{2} + \sqrt{3}$
- (3) $\sqrt{3} - \sqrt{2}$
- (4) $\sqrt{3} - 1$

55. Ravi cycling at a constant speed of 8 km/h reaches the school 6 minutes late. If he cycles at a constant speed of 12 km/hr he reaches the school 6 minutes early. How many km he has to cycle for his school?

- 1. 5 km
- 2. 4.8 km
- 3. 6.4 km
- 4. 4.4 km

Directions (Q.56 – Q.62): Identify the wrong number / letter in the series:

56. 132, 104, 80, 48, 20

- (1) 104
- (2) 80
- (3) 132
- (4) 48

57. 1, 3, 7, 15, 31, 65, 127

- (1) 7
- (2) 31
- (3) 65
- (4) 15

58. 6, 30, 60, 120, 210

- (1) 30
- (2) 60
- (3) 120
- (4) 210

59. AD, EG, IJ, MM, QP, UP

- (1) EG
- (2) UP
- (3) QP
- (4) MM

60. 5, 13, 25, 40, 61, 85

- (1) 40
- (2) 61
- (3) 85
- (4) 13

61. 2, 12, 30, 80, 150

- 1. 12
- 2. 80

3. 150 4. 30

62. 0, 4, 18, 45, 100

- (1) 0
- (2) 18
- (3) 45
- (4) 4

63. If the South-West becomes North, then what North-East becomes?

- (1) West
- (2) South
- (3) East
- (4) South-West

64. Raman is 15th from the front in a column of boys. There were thrice as many behind him as there were in front. How many boys are there between Raman and the seventh boy from the end of the column?

- (1) 33
- (2) 34
- (3) 35
- (4) Data inadequate

65. In a row of girls, there are 16 girls between Priya and Natasha. Priya is 32nd from the left end of the row. If Priya is nearer than Natasha to the right ends of the row, then how far is Natasha from the left end of row?

- (1) Data inadequate
- (2) 14th
- (3) 15th
- (4) 16th

Directions (Q.66 – Q.70): Study the following information carefully and answer the questions given below:

P is the father of R, but R is not his son. T is the daughter of R. U is the wife of P. Q is the brother of R. S is the son of Q. V is the wife of Q. W is the father of V.

66. Who is the paternal grandmother of S?

- (1) W
- (2) P
- (3) R
- (4) U

67. Who is the son of U?

- (1) Q
- (2) R
- (3) T
- (4) S

68. Who is the father-in-law of Q?

- (1) R
- (2) P
- (3) T
- (4) W

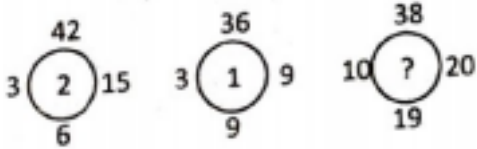
69. Who is the sister-in-law of R?

- (1) S
- (2) V
- (3) U
- (4) T

70. Who is the cousin of T?

- (1) R
- (2) Q
- (3) W
- (4) S

71. What value will replace “?” in the figures given below:



- (1) 0
- (2) 1
- (3) 2
- (4) 3

72. In the following matrix, certain numbers are arranged in a certain way. Choose the missing number to complete the matrix.

2	5	8
3	7	?
8	40	80

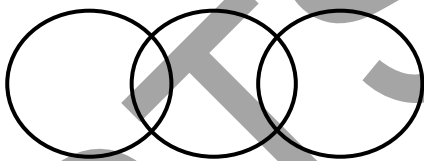
- (1) 12
- (2) 9
- (3) 6
- (4) 15

73. IF ‘-’ stands for ‘÷’, ‘+’ stands for ‘x’, ‘÷’ stands for ‘-’ and ‘x’ stands for ‘+’. Which of the following equation is correct?


- (1) $40 - 10 + 5 \div 4 \times 5 = 21$
- (2) $40 + 10 - 4 \times 5 \div 3 = 80$
- (3) $40 \div 10 - 4 \times 5 + 3 = 32$
- (4) $8 - 4 \times 40 \div 2 + 15 = 30$

74. Which of the following Venn diagram truly represents the relationship between Animals, Mammals, Goat.

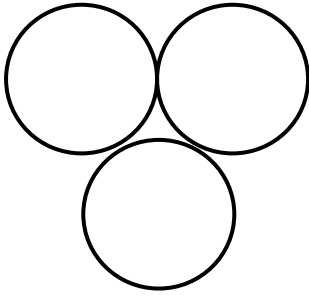
(1)



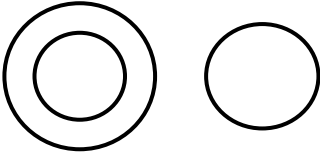
(2)



(3)

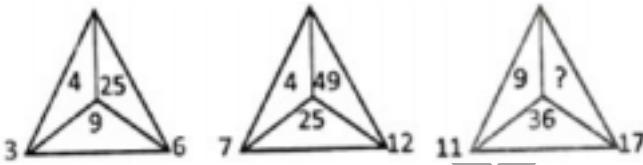


(4)



75. Find the ratio in which wheat at Rs.14.40 per kg be mixed with wheat at Rs.11.40 per kg to produce a mixture worth Rs.12.60 per kg?

- (1) 1:2
- (2) 3:4
- (3) 2:3
- (4) 4:5

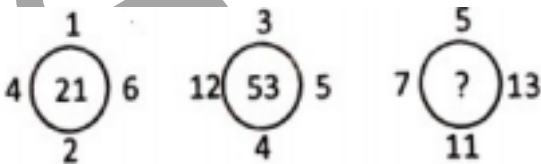


Direction: (Q.76 and Q.77): Find the missing number in the following figures:.

76. How many persons take lassi?

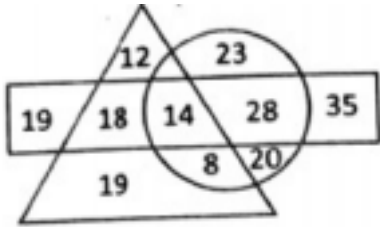
- (1) 81
- (2) 93
- (3) 98
- (4) 114

77.



- (1) 75
- (2) 70
- (3) 107
- (4) 73

Direction: (Q. 78 to Q.82): Study the diagram and answer each of the following.



Persons who take tea

Persons who take lassi

Persons who take coffee

78. How many persons take tea and lassi but not coffee?

- (1) 18
- (2) 14
- (3) 22
- (4) 24

79. How many persons are there who take both tea and coffee but not lassi?

- (1) 18
- (2) 14
- (3) 8
- (4) 12

80. How many persons take lassi?

- (1) 81
- (2) 93
- (3) 98
- (4) 114

81. How many persons are there who take only coffee?

- (1) 34
- (2) 43
- (3) 38
- (4) 49

82. How many persons take all the three?

- (1) 8
- (2) 14
- (3) 18
- (4) 12

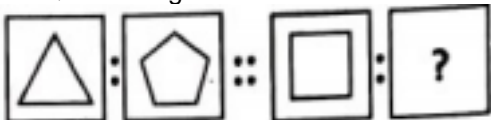
83. $\sqrt{10 + \sqrt{x + \sqrt{108 + \sqrt{154 + \sqrt{225}}}}} = 4$

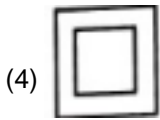
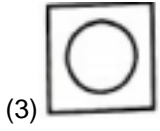
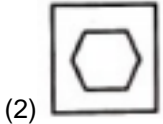
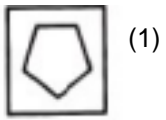
- (1) 16
- (2) 21
- (3) 25
- (4) 36

84. If 'DIVINE' is coded as 'AFSFKB' then 'POWERFUL' is coded as

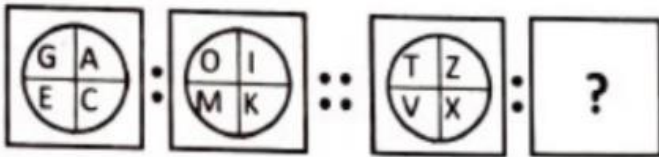
- (1) XLHOJVIM
- (2) MILTBDCRI
- (3) MLTBOCRI
- (4) HLTBNCRI

85. Question figure:



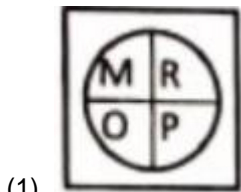




86. Question Figure:

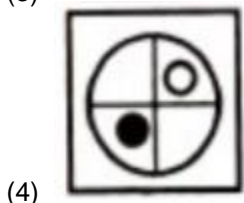
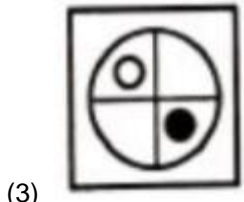
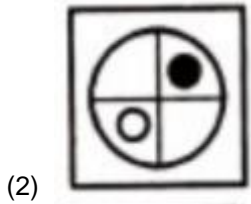
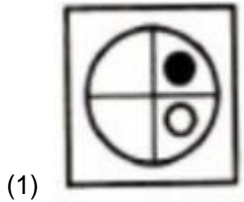
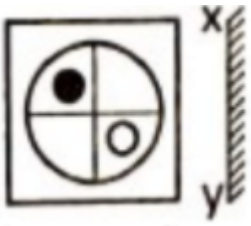


Answer Figure:

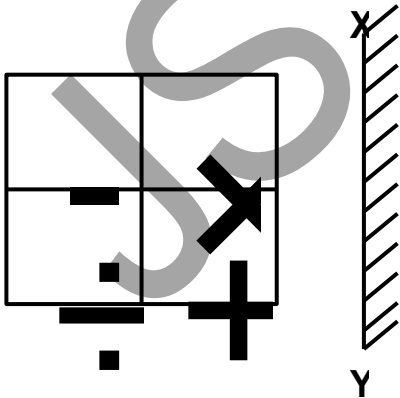


Direction: (Q87 and Q88): If a mirror is kept on a line. Which is image figure?

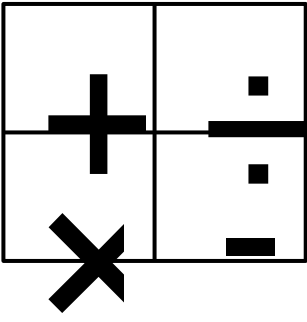
Question figure:



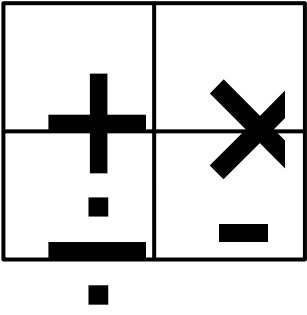
88. Question figure:



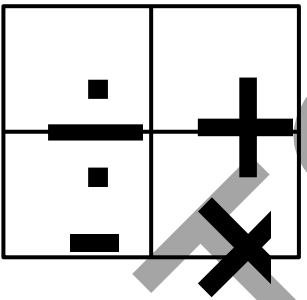
(1)



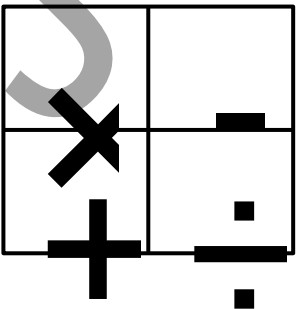
(2)



(3)



(4)



Direction: (Q. 89 to Q.93): Find the missing numbers in given figures.



89.

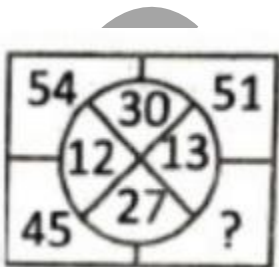
- (1) 54
- (2) 51
- (3) 48
- (4) 44

90.

2	2	4
4	8	16
6	?	36

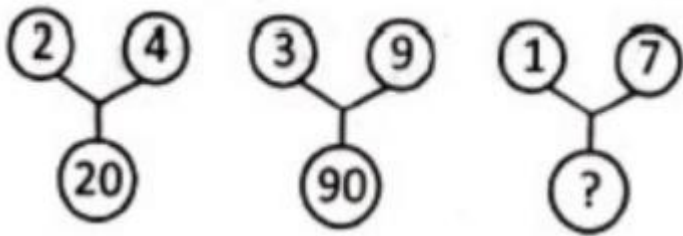
- (1) 32
- (2) 15
- (3) 48
- (4) 18

91.



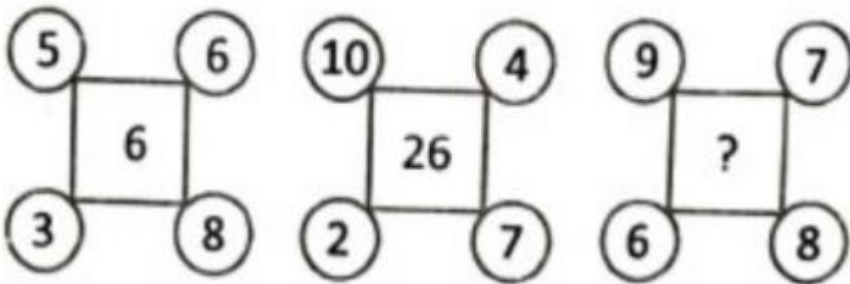
- (1) 39
- (2) 42
- (3) 48
- (4) 66

92.



1. 20
2. 25
3. 50
4. 75

93.



- (1) 13
- (2) 15
- (3) 36
- (4) 16

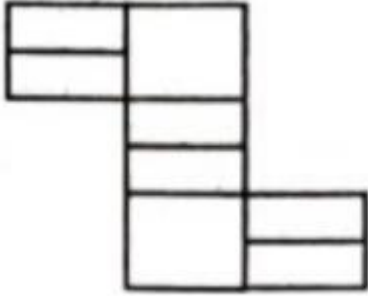
94. Three position of dice are given below:



To find the opposite face of 6

- (1) 1
- (2) 4
- (3) 5
- (4) 7

95. How many rectangles are there in the given figure?



- (1) 8
- (2) 18
- (3) 19
- (4) 20

96. The correct arrangement of alphabetical order of the words.

- (a) Million
- (b) Monarch
- (c) Monk
- (d) Minimum
- (1) a, b, c, d
- (2) b, a, c, d
- (3) c, b, a, d
- (4) a, d, b, c

97. Pointing to a woman in a photograph a man say, "She is the only daughter of my father's mother-in-law". How is the woman related to the man?

- (1) Daughter
- (2) Mother
- (3) Daughter-in-law
- (4) Mother-in-law

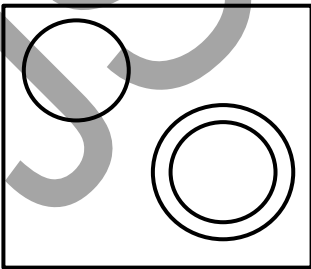
98. A 6cm cube is cut into 2cm small cubes. How many small cubes can be obtained from this?

- (1) 108
- (2) 156
- (3) 27
- (4) 64

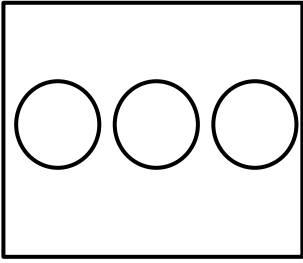
Direction: (Q.99 and Q.100): Identify the diagram that best represents the relationship among the classes given below:

99. Police, Thief, Criminal

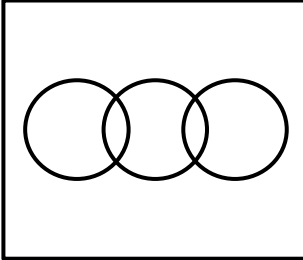
(1)



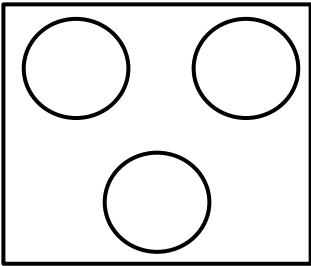
(2)



(3)




(4)

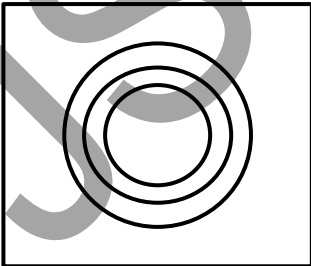


100. District, State, Country

(1)

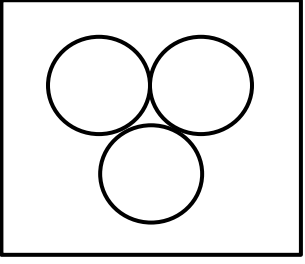
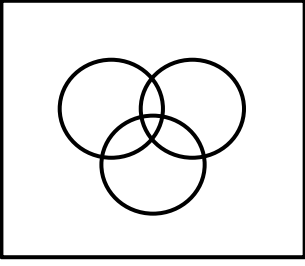


(2)



(3)

(4)



JSTSE GURU